



I B Patel English School (Primary)

2020 -2021

Class – 4

WORKSHEET -1

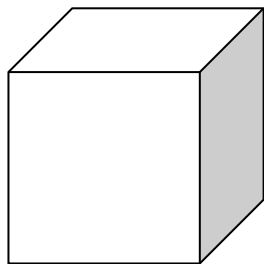
Subject – Maths


Chapter : 1 (Building with Bricks)


Q-1 Fill in the blanks:

1. A brick has _____ edges.
2. A square has _____ sides.
3. A rectangle has _____ faces.
4. A soap has _____ faces.
5. A cuboidal box has _____ corners.
6. A dice has _____ faces.
7. A triangle has _____ sides.
8. If a brick cost Re 5, then cost of 1000 bricks is Rs _____.
9. A triangle has _____ corners.
10. If the cost of 1000 bricks is Rs 3000 then the cost of 1 brick is Rs _____.
11. Can you make a drawing of a brick which shows 4 of its faces? _____
12. Opposite faces of a cuboid are _____.

Q-2 Count and write the number of faces you can see in each of the following figures:





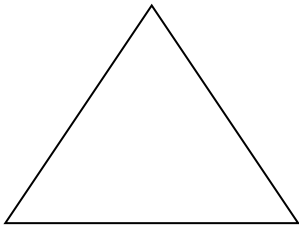


Q-3 Complete the table:


Sl.No	Number of bricks	Cost of bricks	Number of bricks	Cost of bricks
1.	1000	Rs 6000	500	Rs _____
2.	2000	Rs 18,000	1000	Rs _____
3.	3000	Rs 24000	3000	Rs _____

Q- 4 Tick (✓) ,mark the face of the brick:


1.




2.



3.



4.



Q- 5 Draw two wall patterns using bricks:

1.

2.



