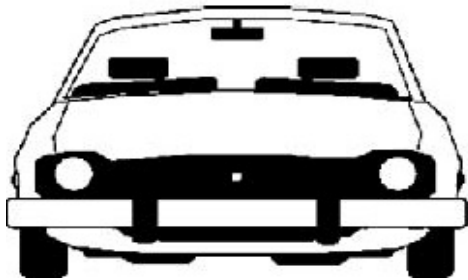


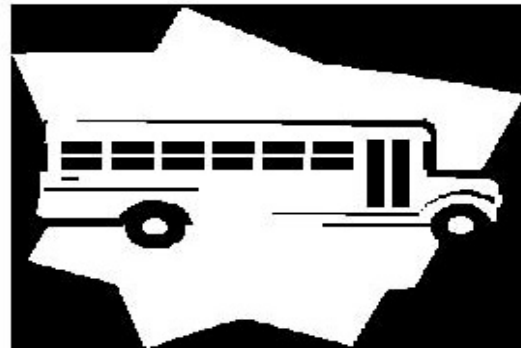


I B Patel English School (Primary)
2020 -2021
Class – 3
WORKSHEET
Subject – Maths
Chapter : 1 (Where To Look From)

Q 1. Underline the correct view to look at these things.



TOP / SIDE / FRONT



TOP / SIDE / FRONT

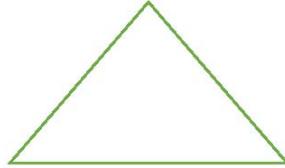
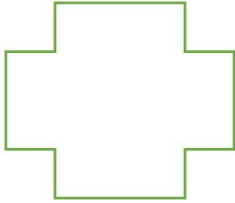
Q 2. Guess the words by looking at these halves and complete them.

DICE


V
H
C

Q 3. Draw dotted lines to divide the figures into two similar halves.

A M U W



Q 4. Draw the top view of any one thing in the space provided.



Q 5. Answer the following questions.

1. How many straight lines are required to make the alphabet **N**?

2. What least number of matchsticks do you need to make a rectangle?

3. Can you make a square using four equal matchsticks?

4. How many matchsticks are required to make a triangle?

5. Name two symmetrical objects, which you see in your surroundings.
