



I B Patel English School (Primary)

2020 - 2021

Class - 2

WORKSHEET

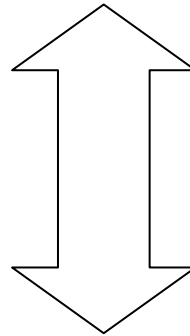
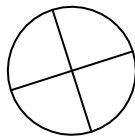
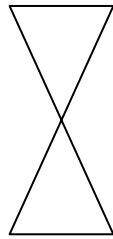
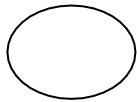
Subject - Mathematics

Chapter - 1 (What is Long, What is Round?)

Q 1. Fill in the blanks.

- (1) Round has no _____.
- (2) A ball can _____.
- (3) A coin can both _____ and _____.
- (4) A book can _____.
- (5) A wheel is _____ in shape.

Q 2. Circle the long things.



Q 3. Name the things which can

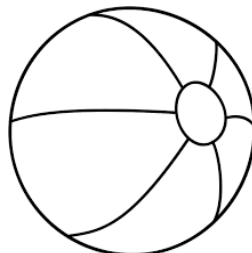


Roll : _____

Slide : _____

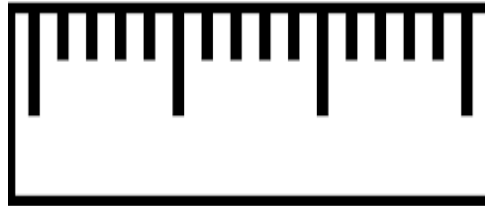
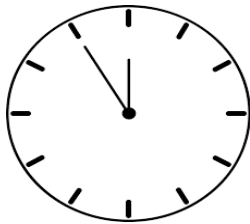

Q 4. (a) Name any five long things:

(b) Write the names of any five round things:

Q 5. Colour the objects that are round:



Q 6. Colour the objects with corners in red and without corners blue.



Q 7. Write the names of some objects which are in the given shape:

(Box, Ball, Powder tin, Scale, Ice cube, Moon, Water Bottle, Dice)

Shapes	Objects
